



KERALA STATE INSTITUTE OF DESIGN

Design Aptitude Test for Post Graduate Diploma Programmes in Design 2018

Integrated Textile and Apparel Design

Name	Applicant Roll Number			
		A	018	KSID

Instructions for Candidates

Please read the following instructions carefully:

- 1) Do not remove the seal until the invigilator instructs you to open the booklet
- 2) Make sure that the answer sheet is not damaged in anyway
- 3) Use only black/blue ink pen for answering the questions and coloured pencil/sketch pens for illustrating
- 4) This question paper has two parts: Part A and Part B

	Questions	Marks
Part A	50	50
Part B	5	50

- 5) The duration of this test is three hours
- 6) Do not attempt to copy or allow others to copy. Any malpractice will lead to cancellation of your candidature
- 7) Return the test booklet, answer sheets and anyother work sheets/rough work to the invigilator before you leave the exam hall
- 8) Candidates are not allowed to move out of the hall once the examination starts



Part A

(50 questions, 1 mark each)

1. Why do most ball point pen caps have a hole on its top?

A:

2. This is a common logo seen in many plastic goods. What does it mean?



A:

3. This is a common logo seen in many consumer products, especially electronic goods. What does it mean?



A:

4. What is the full form of www?

A:

5. Who is M F Hussain?

A:

6. Who is Manish Malhotra?

A:

7. "Titan" belongs to which group of companies?

A:

8. What defines 'cool colours'?

- a) Colours ranging from blues to purples and greens
- b) Colours that are more vivid in nature
- c) Dark colours
- d) Yellows and Oranges

A:

9. In design, the terminology 'monochrome' refers to:

- a) Black and white
- b) Tones of a single colour
- c) Multiple colours
- d) None of the above

A:

10. What is the full form of FMCG?

A:

11. What is the full form of pdf?

A:

12. Who is the largest employer in this list?

a) McDonald's b) Walmart c) Indian Railways d) United States Postal Service

A:

13. What kind of art form is called 'Kuchipudi'?

A:

14. 'Channapatna' toys traditionally are made with which material?

A:

15. Who is the founder of Microsoft?

A:

16. Which company made the first Mobile Phone?

A:

17. 'Kathakali' the dance drama belong to which state of India?

A:

18. Name the founder of the world's most popular social networking site - Facebook?

A:

19. India stands as the fourth largest producer of rubber in the world. Which state in India produces the highest amount of rubber?

A:

20. Find the odd one out of the following:

a) Rolex b) Gucci c) Swatch d) Rolls Royce

A:

21. If you were to make a transition from the colours red to orange, what other recognizable primary colour or colours would be formed in between?

A:

22. On a normal door in a commercial space, if you had to indicate the 'push' and 'pull' without text how would you solve this?

A:

23. As the story goes, a soap manufacturing company was getting several complaints from their customers stating that when they picked up the soap from retail outlets there was no soap in the neatly covered and sealed packaging. Since the entire process is mechanical the soap that comes out of the machine automatically is sent through another for packaging and this automatically gets dumped into a carton box for sending to vendors. What was happening is that many a times technology was giving way and the machines lapsed in some instances where the empty soap packaging covers alone were being parceled by the machine. The company recruited a designer to solve the problem. What would the designer have done to ensure the empty packages did not get put in the carton box?

A:

24. What is K in CMYK colour system?

A:

25. A person travels 10 KM north from his original spot, moves to right and travels 5 Km. He then moves his left another 5 km. He turns further left and travels another 5 KM. If all his travels are in a straight line what will be his final distance from the original spot.

A:

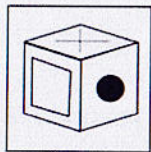
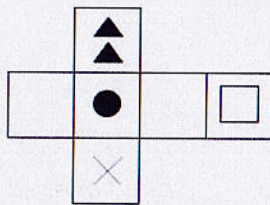
26. If hundred people can do a job in 10 days how many people are needed to complete the same work in 5 days?

A:

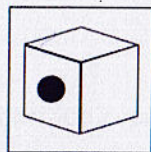
27. What are e-commerce sites?

A:

28. When folded, which box can be made from the 2D image shown below?



A



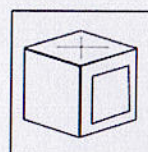
B



C



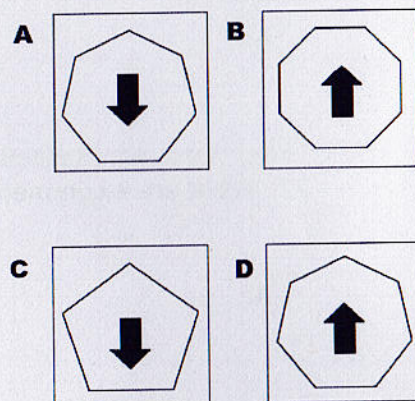

D



E

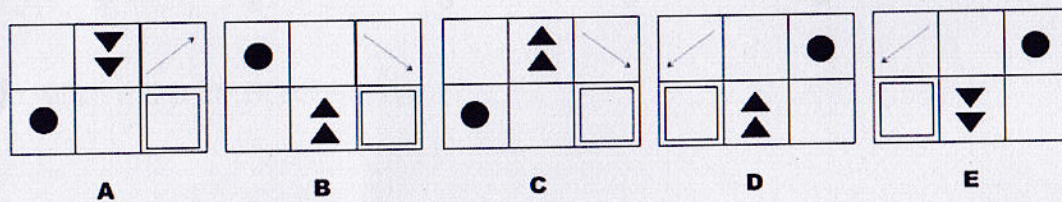
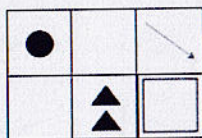
A:

29. What figure should come at '?'



A:

30. Which answer shows a reflection of the image below?



A:

Fill in the given blanks with suitable words

31. Buffaloesgrazing in the field.

32. Rahulgoing to London.

33. Today is Sunday. Tomorrow willMonday.

34. The music was composedA R Rahman.

35. Identify which of the following are correct:

- a) I could of/should of done it better
- b) I could have/should have done it better

A:

36. Identify which of the following are correct:

- a) Nikhil and myself were to work on the project
- b) Nikhil and I were to work on the project

A:

37. Fill in the following with the proper tense

Neelima.....a sandwich this morning (to eat)

A:

38. How many times _____ not to do that?

- a) haven't I told you b) have I told c) I told you d) have I told you

A:

39. Choose the correctly spelt word:

- a) depot b) bouquet c) banquet d) budget

A:

40. The voters complain that their MLA visits the constituency only

- a) once in a blue moon b) in the long run
- c) in the nick of time d) off and on

A

41. Name the Indian State where "PHULKARI craft" is traditionally done

A:

42. Name the Indian State where "KANTHA embroidery" is traditionally done

A:

43. Name the Indian State and the place where the traditional "PATOLA Sarees" are woven

A:

44. Name two places in India famous for the manufacture of hosiery (knitted garments)

A:

45. Name the resist process where wax is used to prevent the fixation of dye to the cloth

A:

46. Name two States of India where jute plants are grown in abundance

A:

47. Name any two techniques that could be used to ornament the surface of any fabric

A:

48. Name the improvised charkha/ hand driven spinning wheel developed by the KVIC, that can produce many number of threads simultaneously

A:

49. Name the natural fibre used in the manufacture of textile that is considered to be the most comfortable to wear

A:

50. Name two manmade fibres of importance in the manufacture of textiles.

A:

Part B

1. Draw picture of an interesting flower. Create a pattern using a motif derived from this flower. Use this pattern to design a saree using proper proportions and scale
(10 marks)

2. Narrate in 300 words the importance of preserving traditional crafts or traditional handloom weaving of the Nation.

(10 marks)

3. Imagine and draw a textile/ garment outlet with various items under display where you have gone to purchase products from.

(10 marks)

4. Draw the attire of any performing arts or classical dance of India and colour this with appropriate colours

(10 marks)

5. Take any geometrical element. Create an interesting pattern by systematically repeating and placing the pattern. Use this interesting pattern to ornament a fabric surface suitable for yardage (dress material/ upholstery)

(10 marks)